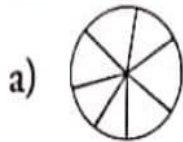


Assignment No: 9      Class – III      Subject: Maths      Teacher Name: Mrs. Neena Gupta

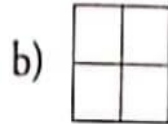
Name \_\_\_\_\_ Class &amp; Sec \_\_\_\_\_ Roll No: \_\_\_\_\_ Date: \_\_\_\_\_

## Lesson 6 : Fractions

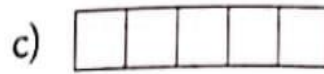
1. Colour the picture according to the fractions.



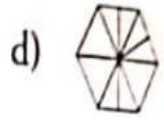
$\frac{5}{7}$



$\frac{3}{4}$



$\frac{2}{5}$



$\frac{4}{9}$

2. Write the following in numbers.

a) seven-eighths

b) two-fifths

c) three-fourths

d) six-ninths

3. Write in words.

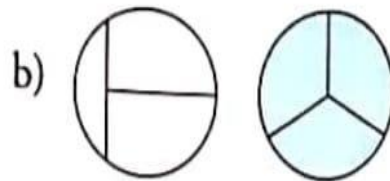

a)  $\frac{8}{10}$

b)  $\frac{1}{3}$

c)  $\frac{3}{6}$

d)  $\frac{2}{7}$

4. Tick (✓) the shape that shows three-thirds.



5. Tick (✓) the shape that shows four-fourths.

